


# Under the Sea

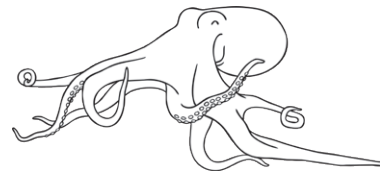
## I Spy and Count Checklist **Answers**

Count the number of each under the sea item and write the numeral in the box.


5 turtles



4 octopus



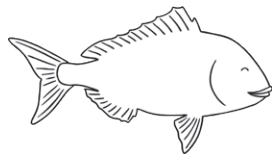
9 starfish




5 anchors



10 fish




3 dolphins




6 seahorses



1 whales




2 sharks




# Under the Sea I Spy and Count Checklist

Count the number of each type of under the sea object and write the numeral in the box.


turtles



octopus




starfish




anchors



fish




dolphins




seahorses



whale



sharks



# Under the Sea I Spy and Count

